


Four brothers came to Thanksgiving dinner.



They each brought three pumpkin pies. How many pies were at the dinner?



0

Three sisters came to Thanksgiving dinner.




They each mashed the potatoes for 9 minutes. How long were the potatoes mashed?



0

Two mothers came to Thanksgiving Dinner.




They each brought two dogs with them. How many dogs were at the Thanksgiving dinner?



0

Five fathers came to Thanksgiving dinner.




They each ate five pieces of turkey. How many pieces of turkey were eaten by them?



0

Five children came to Thanksgiving dinner.




They each slept for two hours after dinner. How many hours of sleep were had by all?



0

Six Grandmas came to Thanksgiving dinner.



They each entertained the group by singing a funny Thanksgiving tune for 1 hour. How many hours of songs were sang by all?



0

Name: \_\_\_\_\_

Roll both dice. Write the sentences on the dice to form a math problem. Write the problem in the oval and solve. Repeat four more times.

Roll 1:

$\quad - \quad X \quad =$

Roll 2:

$\quad - \quad X \quad =$

Roll 3:

$\quad - \quad X \quad =$

Roll 4

$\quad - \quad X \quad =$

Roll 15

$\quad - \quad X \quad =$