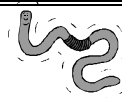


Ghoulees

Name of Graph Maker _____ Date: _____

What kinds of Ghoulees are in your 2 bags? How many do you have of each Ghoulee? Color the graph to show how many you have of each kind.

10					
9					
8					
7					
6					
5					
4					
3					
2					
1					
0					



Name of Graph Reader _____



How many bats? _____



How many worms? _____



How many skulls? _____



How many pumpkin? _____








How many spiders? _____

How many bones altogether?

Ghoulees Sorting

Sort your two packs of Ghoulees into the correct box. Count your Ghoulees & write the number of each in the box!

<p>Bat</p>  <input type="text"/>	<p>Skull</p>  <input type="text"/>
<p>Spider</p>  <input type="text"/>	<p>Worm</p>  <input type="text"/>
<p>Pumpkin</p>  <input type="text"/>	