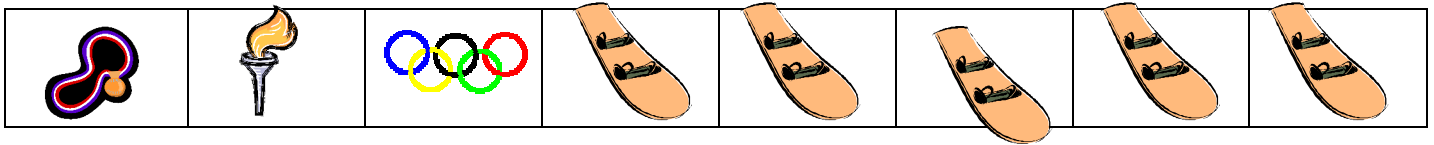





Note To Teacher: Below are two pages for your students. Print pages 1 -2 on separate sheets of paper. Cut out a few of the *Olympic* pictures and show your students how to place them on the graph. Then, allow them to complete the rest. When they are finished, instruct them to complete the graph questions.

It's time for the Winter Olympics! Let's graph the winter Olympic objects. Cut each object out and glue it to the correct space on the graph.



Name _____ Date _____

Graphing For the Winter Olympics



Glue your Winter Olympics Pictures on the correct section of the graph. Answer the questions about your graph.

| | | | | | | | |
|----------------------|--|--|--|--|--|--|--|
| <i>Gold Medal</i> | | | | | | | |
| <i>Torch</i> | | | | | | | |
| <i>Olympic Rings</i> | | | | | | | |
| <i>Ice skate</i> | | | | | | | |
| <i>Snowboard</i> | | | | | | | |
| <i>Skis</i> | | | | | | | |
| <i>Hockey Stick</i> | | | | | | | |



Answer These Questions about your graph!

- 1.) What kind of Olympic pictures do you have the most of?

- 2.) What kind of Olympic pictures do you have the least of?

- 3.) Do you have more gold medal pictures or more torch pictures?

- 4.) How many more snowboard pictures than ice skate pictures do you have?

- 5.) How many skis, hockey sticks, and Olympic Rings do you have altogether?

6.) Do you have more torch pictures or more Olympic Rings pictures? _____

7.) What two pictures do you have the same number of? _____

*Sheet Copyright by C. Gallagher © www.teachingheart.net – 2006 / Graphics Copyright Microsoft
2006*